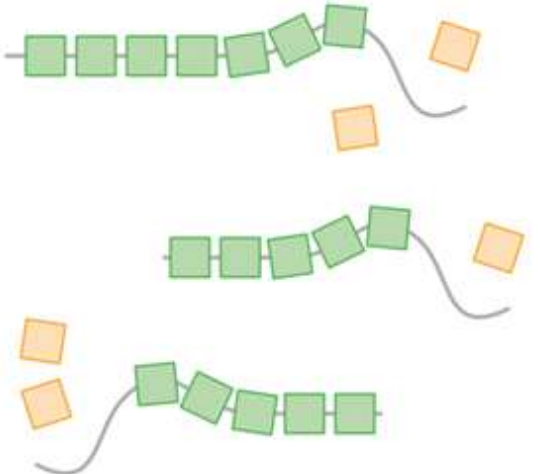

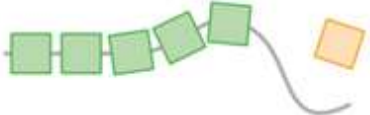

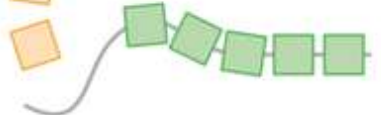

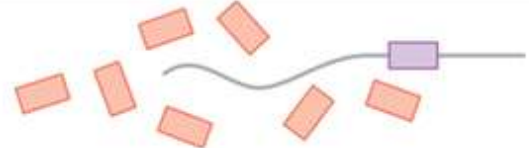




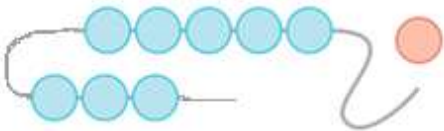


Kiek matai? Kiek jų suverta? Kiek liko nesuvertų?

	$\square - \square = \square$		$\square - \square = \square$
	$\square - \square = \square$		$\square - \square = \square$
	$\square - \square = \square$		$\square - \square = \square$
	$\square - \square = \square$		$\square - \square = \square$
	$\square - \square = \square$		$\square - \square = \square$
	$\square - \square = \square$		$\square - \square = \square$